




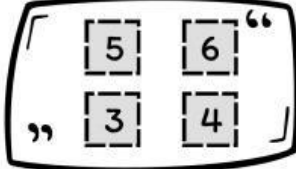
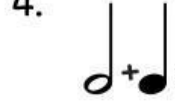
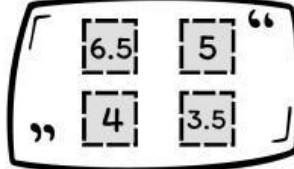

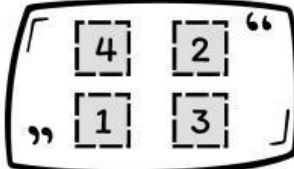
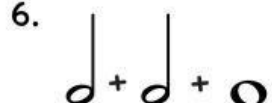
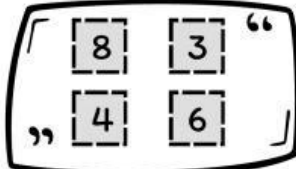

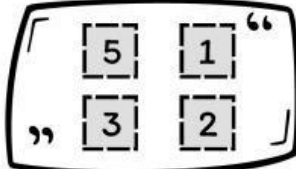

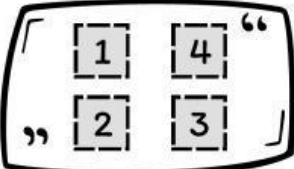

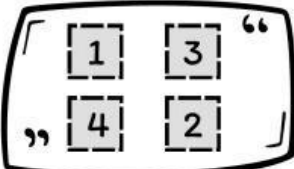

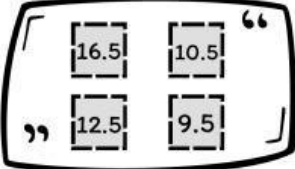


แบบฝึกหัดท้ายบท

เรื่อง อัตราจังหวะ

คำชี้แจง: ให้นักเรียนรวมจำนวนแล้วตอบคำถาม

<p>1.</p>  	<p>2.</p>  	<p>3.</p>  	<p>4.</p>  
<p>5.</p>  	<p>6.</p>  	<p>7.</p>  	<p>8.</p>  
<p>9.</p>  	<p>10.</p>  		

ชื่อ: _____ นามสกุล _____ ชั้น _____