

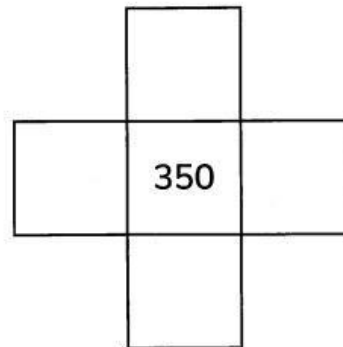
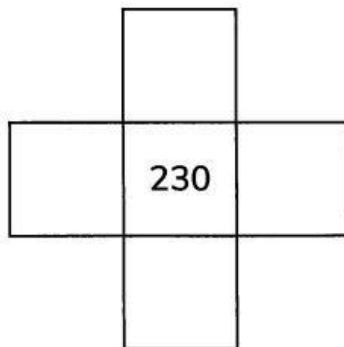
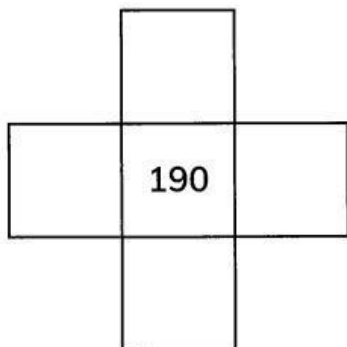
> 1.2 Comparing and ordering

Exercise 1.2

inequality is greater than, $>$
is less than, $<$

Focus

- 1 Complete these pieces, which come from a 1000 strip.



- 2 Compare these numbers and complete the sentences.

100s	10s	1s
2	4	9
1	7	3

_____ is less than _____ and

_____ is greater than _____.

- 3 Write the statements in question 2 using the symbols $<$ and $>$.

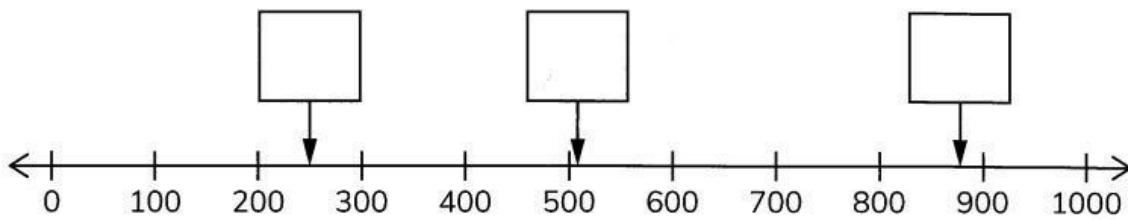
- 4 Order these numbers from smallest to greatest.

327	79	236	64	142
-----	----	-----	----	-----

smallest

greatest

- 5 Estimate the value of each number marked on the number line.



Practice

- 6 Use $<$ and $>$ to write two inequalities about these numbers.

100s	10s	1s
4	5	6
4	6	5

- 7 Order these numbers from greatest to smallest.

968	689	98	69	896
-----	-----	----	----	-----

greatest

smallest