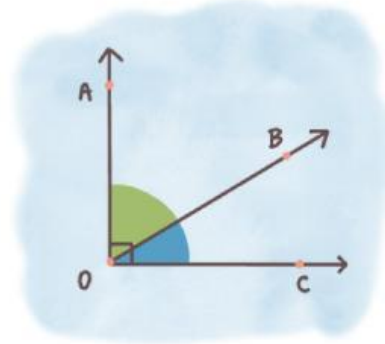


Name :

Class :

COMPLEMENTARY ANGLES

Two angles are called complementary when their sum adds up to 90 degrees.

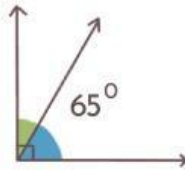


$$AOB + BOC = 90^\circ$$

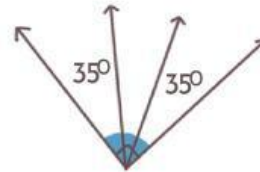
EXERCISE

Find the value of the missing angles!

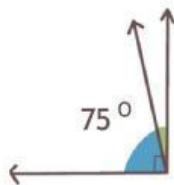
1



2



3



4

