

**AREA:** English, math, science, and social studies.

**SUBJECT:** Self-contained.

**GRADE:** 3rd grade.

**TEACHERS:** Yesenia Ocando, Liceth Sánchez, Tatiana Serrano y Nathaly Arciniegas.













**Name:** \_\_\_\_\_ **Grade:** \_\_\_\_\_ **Date:** \_\_\_\_\_

**UNIT 1 - WE ARE UNIQUE.**  
**FORMATIVE ASSESSMENT #1**

**SCIENCE**

1. Identify the given below images and put them in the correct box.

LIVING THINGS	NON-LIVING THINGS
	
	
	
	
	
	

2. Organize the stages of Camilo's life.



1

2


3

4

5

## SOCIAL STUDIES

1. Look at the following family tree carefully and answer the questions.



**a. How many children are in John's family? Select one answer.**

a. 5

b. 3

c. 10

**b. What does Jhon call his mother's parents? Select one answer.**

- a. Granda and Nanna
- b. Poppy and Nanny
- c. Nanny and Poppy

**c. How many people are in John's family tree? Select one answer.**

- a. 9
- b. 4
- c. 11

**d. How many people are in your family tree?**

**e. Write the name of you family members.**

**f. Who is the oldest member in your family?**

**Resources:**

<https://www.supplyme.com/products/life-cycle-of-a-butterfly-free-printable-worksheet-a7529>

<https://www.splashlearn.com/parent-dashboard#/math>