

Name \_\_\_\_\_ Period \_\_\_\_\_

## Forces - Identifying Forces

Identify each of the following as either a contact or non-contact force, then identify the force as a push or a pull.

1.



Magnetic Force \_\_\_\_\_

2.



Applied Force \_\_\_\_\_

3.



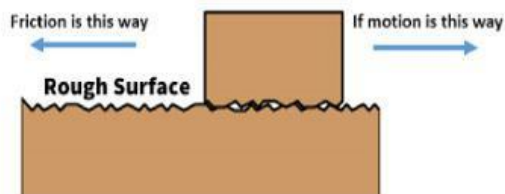
Air Resistance \_\_\_\_\_

4.



Gravity \_\_\_\_\_

5.



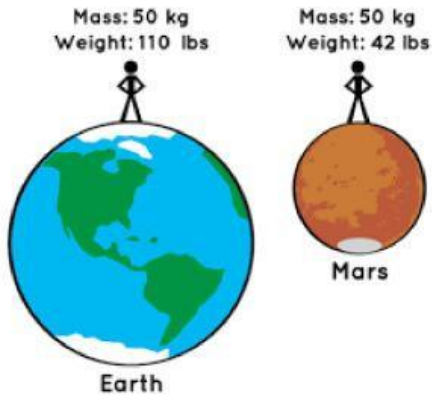
Friction \_\_\_\_\_

6.



Electrical Force \_\_\_\_\_

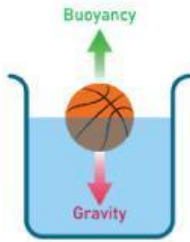
7.



Weight is equal to mass x gravity. As gravity changes, so does weight.

Weight \_\_\_\_\_

8.



Buoyant Force \_\_\_\_\_