

Kindergarten Math Practice

Addition

$6 + 3 =$

$8 + 1 =$

$2 + 6 =$

$4 + 5 =$

$3 + 2 =$

$1 + 1 =$

$9 + 2 =$

$5 + 4 =$

$7 + 3 =$

$0 + 9 =$

Count the following

Count the Number of Apples Below:



Question: How many apples are there?

Answer:

Count the Number of Ananas Below:



Question: How many Ananas are there?

Answer:

Count the Number of Oranges Below:



Question: How many Oranges are there?

Answer:

Simple Word Problems

ve 4 oranges and you buy 3
y oranges do you have now

are 6 cars in the parking lo
leave, how many cars are s
rking lot?

e 8 ducks at the pond.
s swim away, how many
e left?

ve 7 pencils and you find 2
y pencils do you have altog

are 10 cookies in a jar.
4 cookies, how many
are left in the jar?

✓ Addition ✓ Subtraction ✓ Counting ✓ and More!

LIVEWORKSHEETS

Addition

Solve the following :

$$2 + 3 =$$

$$6 + 3 =$$

$$1 + 5 =$$

$$8 + 1 =$$

$$4 + 4 =$$

$$2 + 6 =$$

$$7 + 2 =$$

$$4 + 5 =$$

$$6 + 1 =$$

$$3 + 2 =$$

$$0 + 8 =$$

$$1 + 1 =$$

$$3 + 3 =$$

$$9 + 2 =$$

$$5 + 2 =$$

$$5 + 4 =$$

$$9 + 0 =$$

$$7 + 3 =$$

$$7 + 1 =$$

$$0 + 9 =$$

subtraction

Solve the following :

$$9 - 4 =$$

$$8 - 6 =$$

$$8 - 3 =$$

$$7 - 5 =$$

$$7 - 2 =$$

$$6 - 2 =$$

$$6 - 5 =$$

$$5 - 4 =$$

$$5 - 1 =$$

$$4 - 3 =$$

$$4 - 0 =$$

$$3 - 2 =$$

$$3 - 3 =$$

$$2 - 0 =$$

$$2 - 1 =$$

$$1 - 1 =$$

$$1 - 0 =$$

$$0 - 0 =$$

$$9 - 7 =$$

$$9 - 9 =$$

Simple Word Problems

**1- You have 4 oranges and you buy 3 more.
How many oranges do you have now?**

**2- There are 6 cars in the parking lot.
If 3 cars leave, how many cars are still
in the parking lot?**


**3- You see 8 ducks at the pond.
If 5 ducks swim away, how many
ducks are left?**

**4- You have 7 pencils and you find 2 more.
How many pencils do you have altogether?**

**5- There are 10 cookies in a jar.
If you eat 4 cookies, how many
cookies are left in the jar?**

Count the following

1 -Count the Number of Apples Below:



Question: How many apples are there?

Answer:

2 -Count the Number of Ananas Below:



Question: How many Ananas are there?

Answer:

2 -Count the Number of Oranges Below:



Question: How many Oranges are there?

Answer:

Count the following

4 -Count the Number of Stars Below:



Question: How many Stars are there?

Answer:


5 -Count the Number of Tomatoes Below:



Question: How many Tomatoes are there?

Answer:

6 -Count the Number of Batatas Below:






Question: How many Batatas are there?

Answer:

Number Patterns

Question: What comes next?



Comparing Numbers

Color the apple with the larger number ?



Comparing Numbers

Color the apple with the larger number ?

