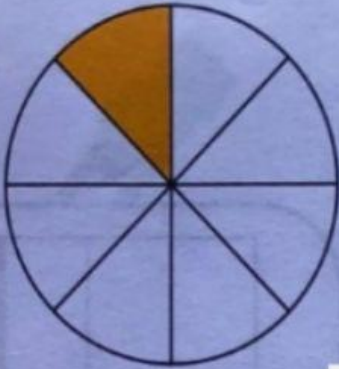


Look at the diagrams carefully. Fill in the spaces with the correct answers.

FRACTIONAL PARTS

4



Fraction shaded: $\frac{\quad}{\quad}$

Name in words:

5



Fraction shaded: $\frac{\quad}{\quad}$

Name in words:

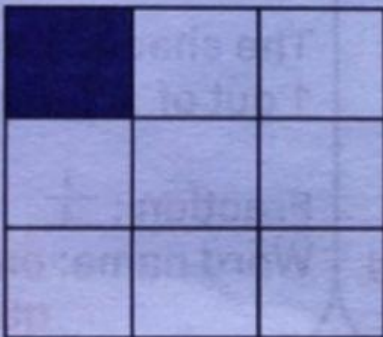
6



Fraction shaded: $\frac{\quad}{\quad}$

Name in words:

7



Fraction shaded: $\frac{\quad}{\quad}$

Name in words:

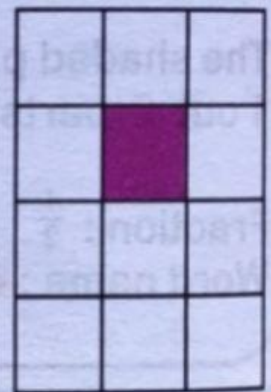
8



Fraction shaded: $\frac{\quad}{\quad}$

Name in words:

9



Fraction shaded: $\frac{\quad}{\quad}$

Name in words: