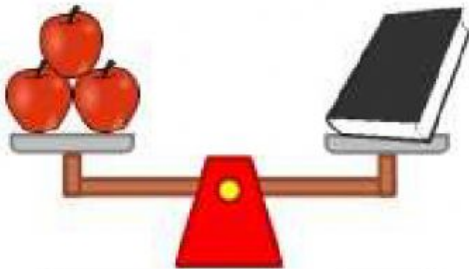
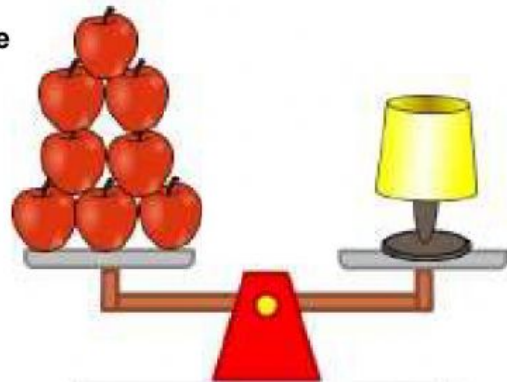


# How Much does it Weigh?


Look at each balancing scale and measure how much each object weighs. Write your answer on the line.



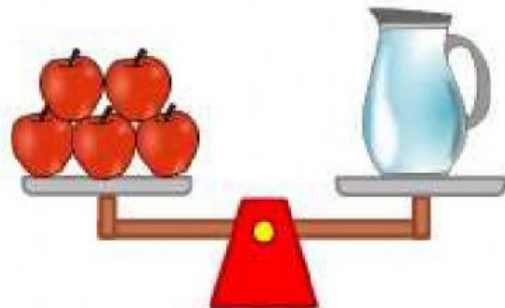
The weight of the book  
in apples is \_\_\_\_\_.



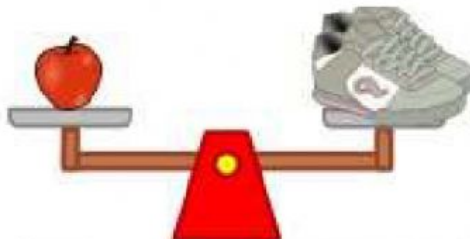
The weight of the table  
lamp in apples is \_\_\_\_\_.



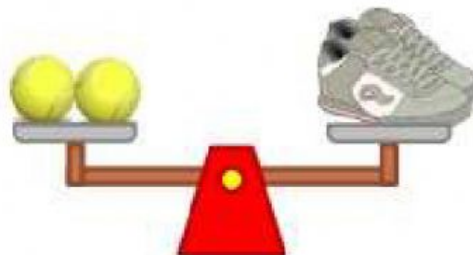
The weight of the pencil case  
in apples is \_\_\_\_\_.



The weight of the pitcher  
in apples is \_\_\_\_\_.



The weight of the trainers  
in apples is \_\_\_\_\_.



The weight of the trainers  
in tennis balls is \_\_\_\_\_.

Which object is the heaviest? \_\_\_\_\_