
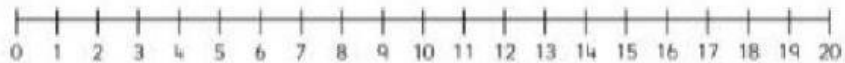



Matemātika 1.klase
Rēķināsim uz lineāla.




$$9 + 7 = \square$$




$$14 + 3 = \square$$



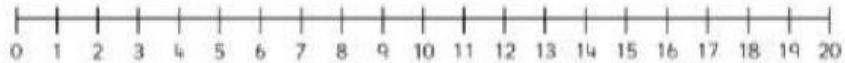
$$17 + 2 = \square$$



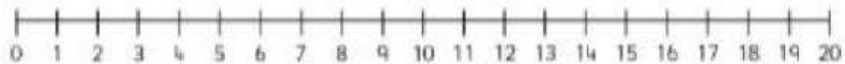
$$5 + 11 = \square$$



$$6 + 6 = \square$$



$$8 + 12 = \square$$



$$13 + 3 = \square$$