

NAME: _____
DATE: _____

AGRICULTURAL SCIENCE

2nd

Grade

Select the correct answer

1. Harmful insects _____ plants.

a. destroy b. beautify c. produce

2. What insects make holes in yam tubers?

a. Snakes b. Earthworm c. Beetles

3. What can be described as a short horned grasshopper?

a. Locust b. Bee c. Ant

4. Earthworms allow air into the _____.

a. plant b. soil c. grain

5. Earthworms live in the _____.

a. sky b. soil c. water

6. Earthworms help _____ the soil.

a. harden b. loosen c. color

7. Earthworms mix dead leaves with soil to improve _____.

a. taste b. color c. nutrient

NAME: _____
DATE: _____

8. Farmers need to control _____ on the farm.

- a. friends b. players c. enemies

9. Birds destroy the _____ of plants.

- a. fruits b. stem c. bottom

10. Why are rodents farmer's enemies?

11. Plants need all of these except _____.

- a. sunlight b. water c. fire

12. _____ can be used to catch farmer's enemies, dead or alive.

- a. Traps b. Cage c. Water

13. What harm do crabs cause farmers? _____

15. _____ are little animals with wings and legs.

- a. Insects b. Fish c. Reptile

16. _____ carries pollen from one flower to another.

- a. Butterfly b. Termites c. Praying mantis

NAME: _____
DATE: _____

17. You need to transport the fertilizer from the storage to the farm. Which of the following will enable you to perform the task? a. Pail b. Spade c. Shovel d. Wheelbarrow

18. Which farm equipment is used for digging?

a. Shovel b. Plough c. Sickle d. Sprinkler

19. Which farm tool is used to level loose soil?

a. rake b. axe c. sickle d. Cutlass

20. Farm tools are very important because they _____.

a. make work faster b. save time and effort

c. make work easier d. All of the above

21. A tool with one end of its blade flattened and the other pointed and attached to a wooden handle is called _____.

a. a spade b. an axe c. a sickle d. a shovel

22. _____ are implements used by farmers to work on the farm. a. School tools b. Farm tools c. Church tools

d. House tools

23. What can you use to break stones?

a. Harrow b. Plough c. rake d. axe

NAME: _____
DATE: _____

24. We use it for wetting plants.

a. Watering can b. Hoe c. Basket d. Seed tray

25. All these are farm tools except,

a. Biro b. Hoe c. Cutlass d. Pruning saw

26. The edge of a cutting tool should be _____.

a. blunt b. Sharpened c. Coloured d. Painted

27. Simple farm tools are used to cultivate a _____ area.

a. small b. large c. mighty d. vast

28. Modern tools are very _____.

a. cheap b. expensive c. low d. none of the above

29. _____ carry pollen from one plant to another.

a. Ants b. Butterflies c. Termites d. Flies

30. _____ is used for cultivating the garden plot by loosening the soil and removing weeds around the plant.

a. Hand fork b. Hoe c. Rake d. Spading fork

31. Carrying tools are used for carrying all the following except, _____.

NAME: _____
DATE: _____

a. crops b. houses c. maize d. beans

32. _____ tools are used for removing unwanted plants.

a. Gathering tools b. Cutting tools c. carrying tools

d. digging tools

33. Watering tools are used to apply water and chemicals to the

_____.





a. water b. book c. crops d. tools

34. _____ is the soil used for planting crops.

a. Sandy b. Clay c. Rock d. Loamy

NAME: _____
DATE: _____

35. Identify where we can use different types of soil. Drag your answer to the box provided below the picture.

Sand	Humus	Sand and Stones	Clay
			
1. <input type="text"/>	2. <input type="text"/>	3. <input type="text"/>	4. <input type="text"/>

PART 2: Answer the following questions.

5. What type of soil is best in growing plants?

Answer: _____

6. What do we use in making house?

Answer: _____

7. What type of soil is best in making pottery products like pots?

Answer: _____

8. What type of soil is best in making glass products like glasses and window pane?

Answer: _____

Fill in the correct answer

36. _____ helps the farmer in the production of honey.

37. What are the parts an insect's body is divided into

_____, _____ and _____.

38. Mention 3 of your best useful insects _____,

_____ and _____

39. A _____ is used to scare farmer's enemies away.

NAME: _____
DATE: _____









a. scarecrow b. trap c. net

40. Name the farm tools below



NAME: _____
DATE: _____

41. Look at each picture of a bug, unscramble the letters and write the names of each bug on the line provided.

 _____	ebe _____	 _____	aglubdy _____
 _____	lebete _____	 _____	disper _____
 _____	tan _____	 _____	turfebtly _____
 _____	morw _____	 _____	lyf _____

INSPIRED TOTS EARLY LEARNING CENTER, JOS
3RD TERM EXAMINATION, 2023/2024

NAME: _____

DATE: _____