


Name: _____



Mathematics

Comparing Numbers to 50



Compare the two numbers in each row. Choose **MORE** or **LESS** to complete each problem correctly.

1.  is



<i>more</i>
<i>less</i>

 than 
2.  is



<i>more</i>
<i>less</i>

 than 
3.  is

<i>more</i>
<i>less</i>

 than 
4.  is

<i>more</i>
<i>less</i>

 than 
5.  is

<i>more</i>
<i>less</i>

 than 