



Study Practice 3

KG. 1 Maths - Zoom Practice 3

1- Read the number and tick the objects to make a set



3




5



4

2- Circle the bigger object



3- Fill in with the missing number

| | | | | |
|---|---|---|---|---|
| 1 | — | — | 4 | — |
|---|---|---|---|---|