




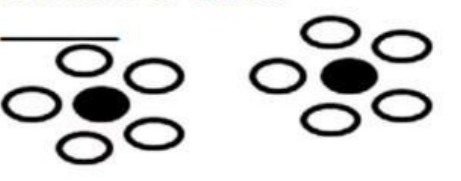






IQ School Primary 5 - Maths

Unit 5: Ratio

Name: _____ ()	Class: _____	Date: _____
----------------------	--------------	-------------

Fill in table with the correct answer after simplifying.

<p>What is the ratio of black counters to white?</p> <p>_____</p>  <p>Simplify your answer _____</p>	<p>What is the ratio of black counters to white?</p> <p>_____</p>  <p>Simplify your answer _____</p>
<p>What is the ratio of white counters to black?</p> <p>_____</p>  <p>Simplify your answer _____</p>	<p>What is the ratio of black counters to white?</p> <p>_____</p>  <p>Simplify your answer _____</p>
<p>What is the ratio of black counters to white?</p> <p>_____</p>  <p>Simplify your answer _____</p>	<p>What is the ratio of white counters to black?</p> <p>_____</p>  <p>Simplify your answer _____</p>
<p>What is the ratio of white counters to black?</p> <p>_____</p>  <p>Simplify your answer _____</p>	<p>What is the ratio of black counters to white?</p> <p>_____</p>  <p>Simplify your answer _____</p>