

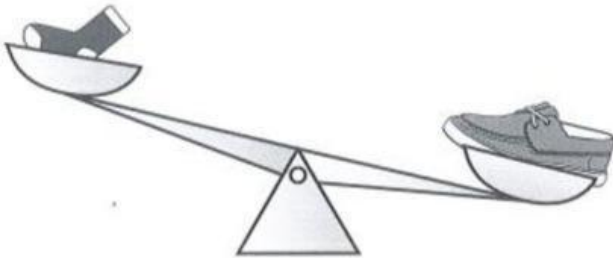
Name: _____

Date: _____

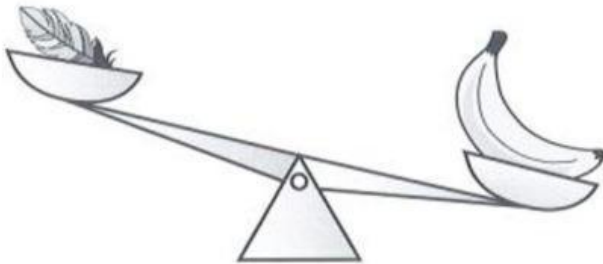
Class: _____

Part 1. Choose the correct answer.

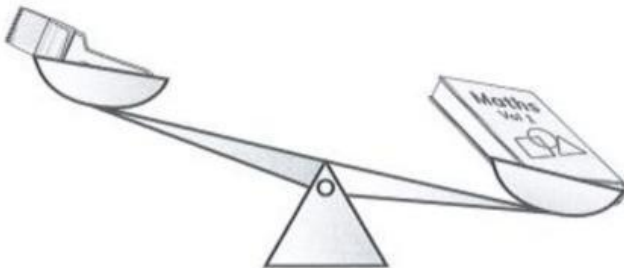
1. Which is heavier?



2. Which is heavier?



3. Which is lighter?



Part 2. Fill in the missing words.

heavier

lighter

balance


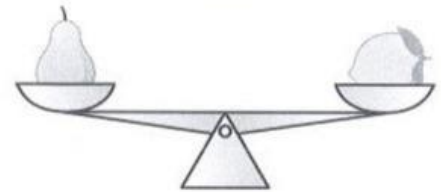
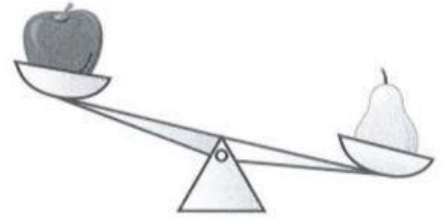
The apple is _____ than the pear.

The pear is _____ than the apple.

The pear and the lemon _____.

The strawberry is _____ than the grapes.

The grapes are _____ than the strawberry.



Part 3. Choose the correct answer.

1. Which holds the most?



2. Which holds the least?



3. Which holds the most?



4. Which holds the least?



5. Which holds the most?

