


Name _____ Date _____

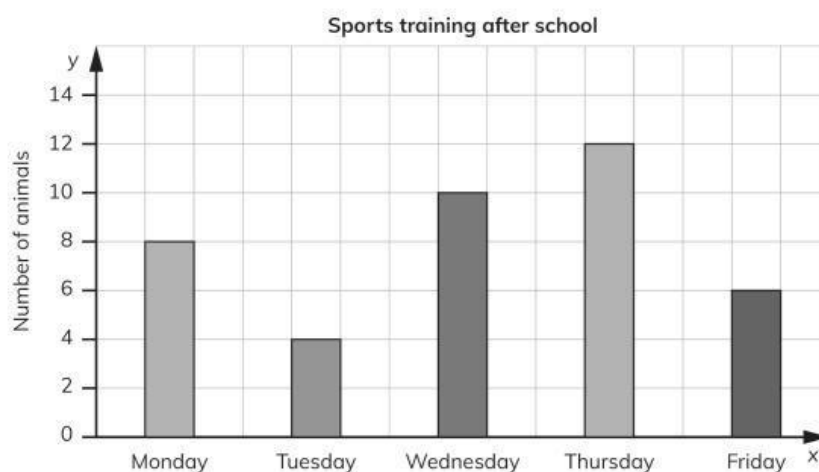
Unit 10 test: Graphs

- 1 Complete the pictogram using the clues.

Key:  = 1 goal

Match	Number of goals
1	  
2	
3	 
4	
5	   
6	

- a Match 2 had three more goals than match 5 = goals
- b Match 4 had twice as many goals than match 3 = goals
- c Match 6 had two less goals than match 5 = goals
- 2 The bar chart shows how many children went to sports training after school.



- a Which day is the most popular? _____
- b Which day is the least popular? _____

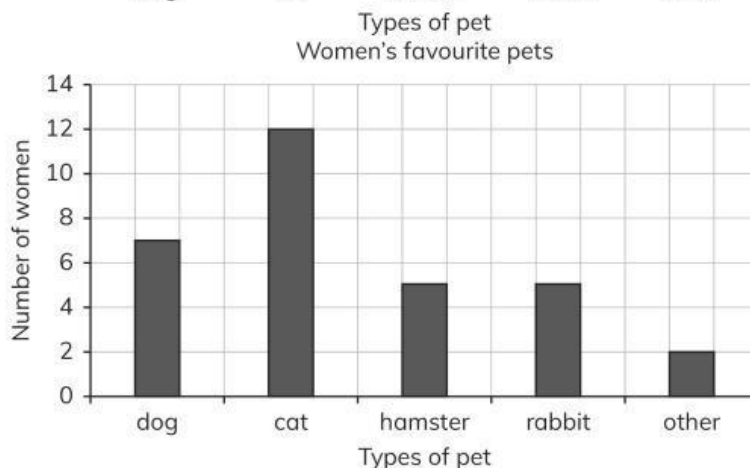
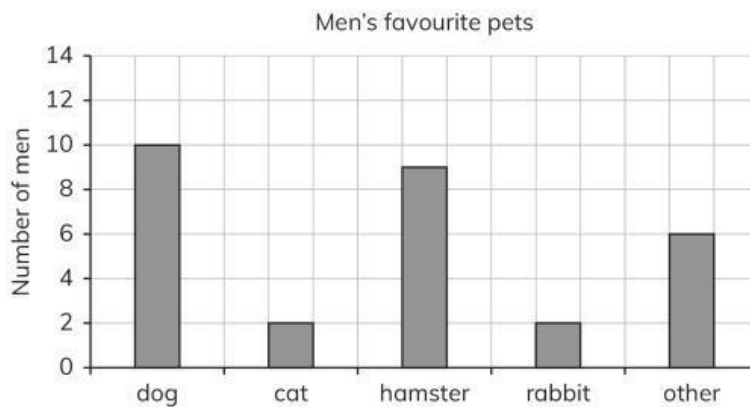
c What is the difference between the number of children doing sports training on Monday and Thursday? _____

3 Draw a ring around the mistakes on the Carroll diagram.

	odd numbers	not odd numbers
less than 100	91 85 67 22 74 16	29 13 54 86 19
not less than 100	108 112 213 165 182	127 108 412 208

b How many mistakes did you find? _____

4 Compare the results in these graphs.



a. How many women chose cats as their favourite pet?

b. How many men chose dogs as their favourite pet?