










# CAMBRIDGE PRIMARY MATHEMATICS 2

## UNIT 6 – REVISION

**Part 1. How many cents in each of these coins worth?**

Coin	Value in cents
Penny	1
Nickel	
Dime	
Quarter dollar	
Half dollar	

**Part 2. Find the total amount of money in each row and each column. Two answers have been done for you.**

			→ US\$12 and 50c
			→
			→
↓	↓ US\$10 and 55c	↓	

**Part 3. Count in fives. What is the total value of these coins?**

