

Measure the angle with a protractor. Is it acute, obtuse or a right angle?

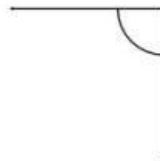
1.



2.



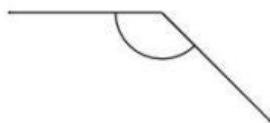
3.



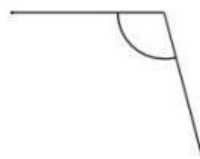
4.



5.



6.



7.



8.



9.

