


Unit fraction

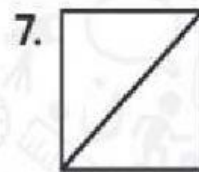


Write how many equal parts. Shade one part. Write its unit fraction.



— equal parts

unit fraction: $\frac{\square}{\square}$



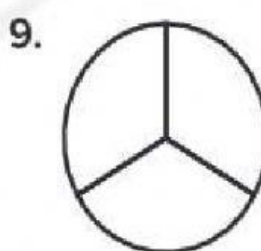
— equal parts

unit fraction: $\frac{\square}{\square}$



— equal parts

unit fraction: $\frac{\square}{\square}$



— equal parts

unit fraction: $\frac{\square}{\square}$