

Study Practice 1

KG. 1 Maths - Zoom Practice 1

1- Count then shade the boxes



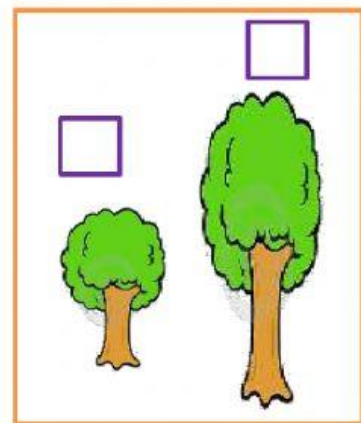
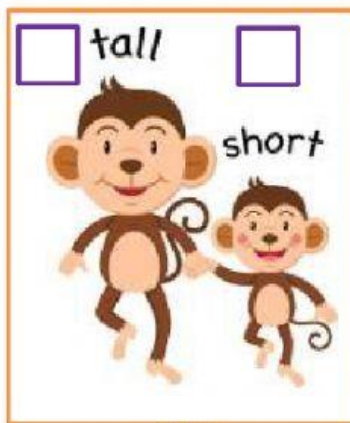





2- Fill in with the missing number

1	—	—	4	—
---	---	---	---	---

3- Compare: Tick the tallest object





Tick to Count the dogs the choose the right number



10

11

12