

D. A. V. PUBLIC SCHOOL, PRATAP-VIHAR, GHAZIABAD

TOPIC – FRACTION

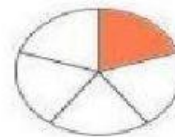
Name: _____

Fractions - Matching fraction and its figure - Worksheet 1

In a fraction the top number, or numerator, tells how many pieces you have.
The bottom number, or denominator tells how many pieces the whole is divided.
Draw line to match each fraction and its figure.

$$\frac{1}{2}$$

•



•

$$\frac{1}{3}$$

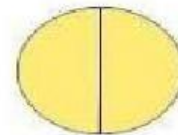
•



•

$$\frac{1}{4}$$

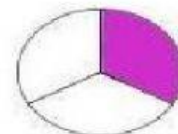
•



•

$$\frac{1}{5}$$

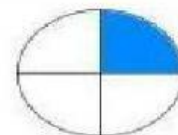
•



•

$$\frac{2}{2}$$

•



•