


Listen and circle the correct one.



How much is the teddy bear?

\$ 14.50

\$ 24.50



How much is the robot?

\$ 38.10

\$ 50.20



How much is the ball?

\$ 8.10

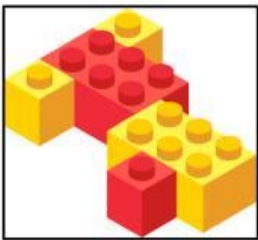
\$ 14.30



How much is the bike?

\$ 42.30

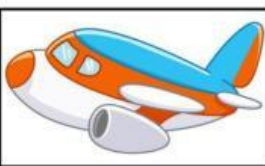
\$ 35.60



How much are the building blocks?

\$ 23.20

\$ 26.35



How much is the plane?

\$ 40.10

\$ 30.10