



1. FINDING THE FURRY CAT

WORKSHEET - 2



SUBJECT : MATHS

CLASS : I

NAME : _____

DATE : _____

Inside and Outside

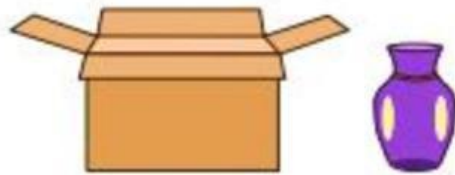
Observe each picture, and check the option that best describes the position of the object in it.

1)



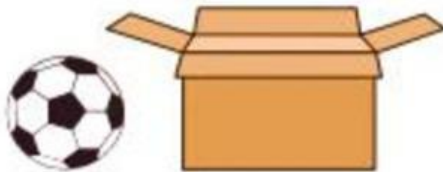
☐ inside ☐ outside

2)



☐ inside ☐ outside

3)



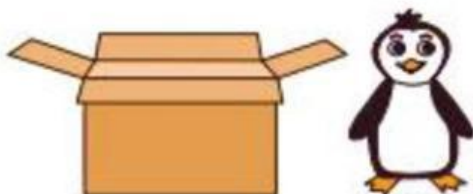
☐ inside ☐ outside

4)




☐ inside ☐ outside

5)



☐ inside ☐ outside

6)



☐ inside ☐ outside

7)



☐ inside ☐ outside

8)



☐ inside ☐ outside

