


Name: _____ Date: _____

Grade 1: Fractions

Divide these shapes into the number of parts shown.




halves (2 parts)



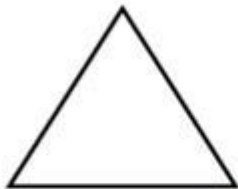
thirds (3 parts)




quarters (4 parts)



quarters (4 parts)



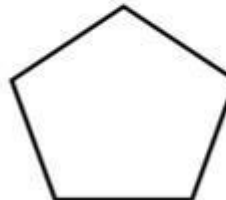
halves (2 parts)



eighths (8 parts)



halves (2 parts)



fifths (5 parts)