

Name: _____

Class: _____

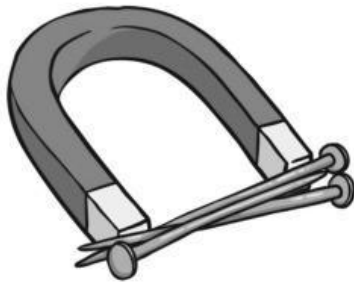
MOCK TEST 2

Time allowance: 35 minutes

Part A

1. Label the pictures using the given words.

friction pull push magnetism



a.



b.



c.



d.

2. Which of the following objects is magnetic? Tick (✓).



a glass



a teddy bear



a steel spoon



a brick

3. Fill in the missing letters then match.



a. c _ r _ ohy _ rat _ s



b. pr _ t _ ins



c. v _ tam _ ns & _ _iner _ ls



d. _ a _ s

• Keep us healthy

• Give us energy and keep us warm

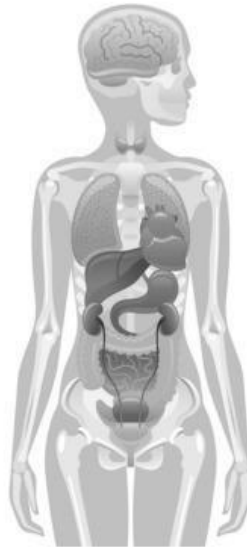
• Help to build muscle

• Give us energy

4. Read the sentences. Tick (✓) True or False.

	True	False
a. All living things need water to survive.	<input type="checkbox"/>	<input type="checkbox"/>
b. Regular exercise is not good for our health.	<input type="checkbox"/>	<input type="checkbox"/>
c. The intestines filter blood and remove waste water from the body.	<input type="checkbox"/>	<input type="checkbox"/>
d. The circulatory system consists of blood, blood vessels, and the heart.	<input type="checkbox"/>	<input type="checkbox"/>

5. a. Divide the human body into three sections and label them.



b. Tick (✓) the correct answer.

A. Which organ helps us breathe?

- kidney brain lung

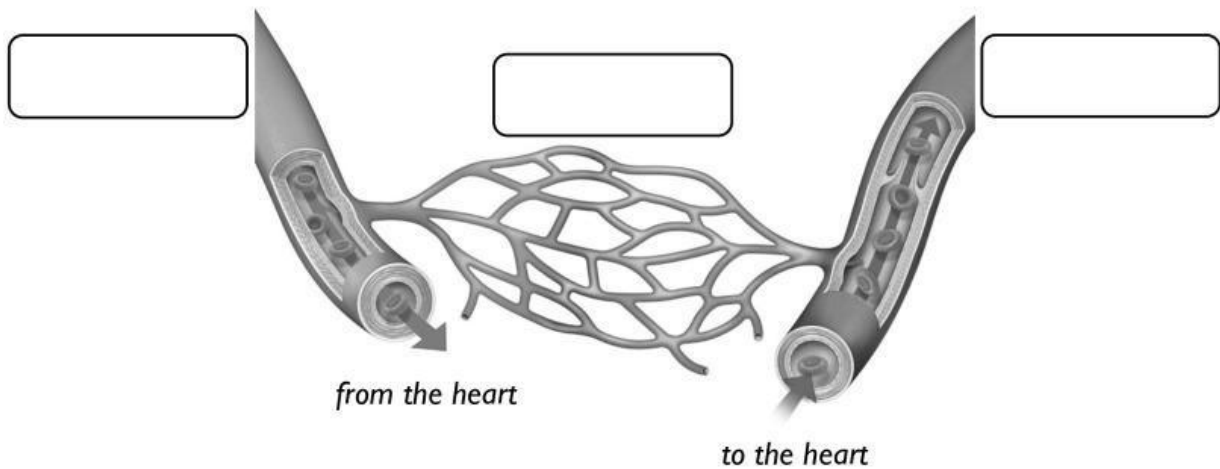
B. Which organ controls many activities of the body?

- brain intestine heart

C. Which organ helps us digest food?

- heart stomach kidney

6. a. Label the diagram.

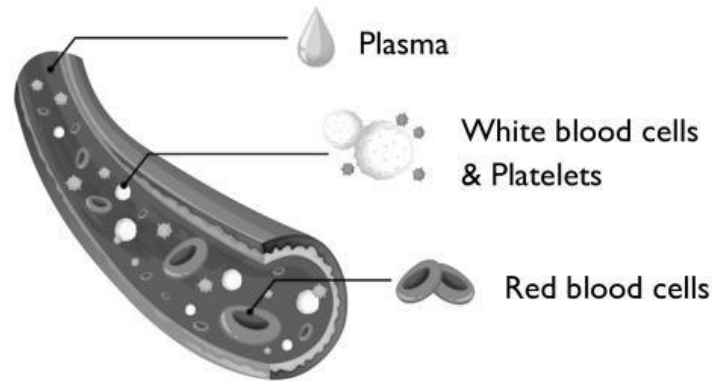


b. What is the function of the circulatory system?

.....

Part B

7. Look at the diagram and complete the table below.



Part of blood	Function
red blood cell	
	helps to fight diseases
	carries salt, carbon dioxide, and nutrients around the body
	helps to stop bleeding

8. Peter is investigating heart rates. He records his heart rate for different activities. He carries out the following activities for one minute each.



At rest



Jogging



Running



Doing homework

Complete the table by adding each activity against Peter's heart rate.

Activity	Heart rate
At rest	65
	80
	140
	105