



Cambridge Primary Programme CAMBRIDGE PRIMARY MATHEMATICS 1

7.1. SETS

Name: _____ Date: _____ Class: _____

Part 1.

Look at the bears.

How many  bears are there?

How many other bears are there?



Draw a ring around the correct answer.

There are more / fewer  bears than other bears.




Part 2.

Sort these animals into the 2 sets by writing the letters in the correct circle.



not stripes



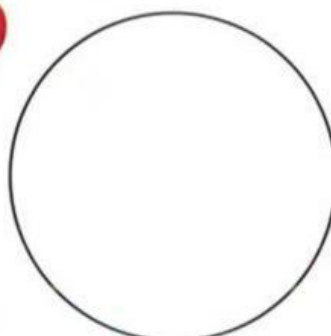

stripes

How many animals have stripes?

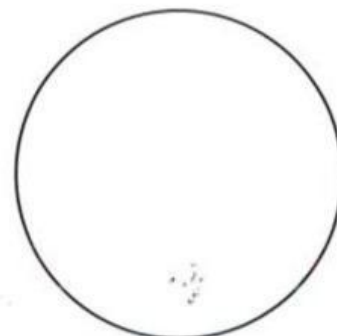
How many animals do not have stripes?

Part 3.

Sort these vegetables into the 2 sets by writing the letters in the correct circle.



red



not red

How many are red?

How many are not red?

Part 4. Label these sets.

