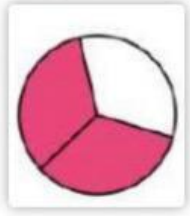

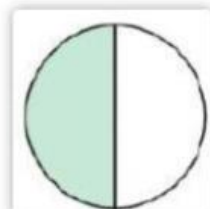


1/Viết phân số chỉ số phần đã tô màu:




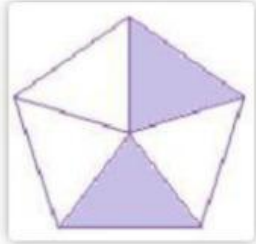





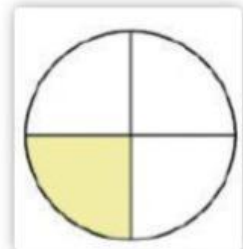















2/Điền số thích hợp vào chỗ chấm:

$$\frac{2}{7} = \frac{\dots\dots\dots}{49}$$

$$\frac{16}{100} = \frac{\dots\dots\dots}{25}$$

$$\frac{\dots\dots}{81} = \frac{3}{9}$$

$$\frac{3}{\dots} = \frac{15}{60}$$

$$\frac{40}{60} = \frac{\dots\dots\dots}{3}$$

$$\frac{11}{44} = \frac{1}{\dots\dots}$$

3/Điền số thích hợp vào chỗ chấm:

a/..... + 37 675 = 92 481

b/..... : 9= 43 578