

Infants B
Mathematics Mid-Term Test
February 23rd, 2020

Name: _____

Type these numbers in words.

Example: 10 ten

a) 2 _____

b) 6 _____

(/2)

Type these number names in figures.

Example: eleven 11

c) four _____

d) five _____

(___/2)

e) Match the following shapes to their names.



sphere



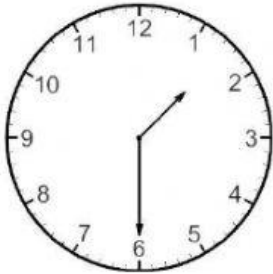
circle



cube

(___/3)


f) What is the time? Drag the correct boxes to the clocks.



3 o'clock



12 o'clock




half past 1

(___/3)

g) Click the right answer.

I am longer.




(___/1)

h) Click the correct answer. Which one holds less?



()/1)

i) Click on all the shapes that have one half ($\frac{1}{2}$) coloured.



()/2)

Calculate the following.

Add

j) $5 + 2 =$

k) 3

$- 1$

(/2)