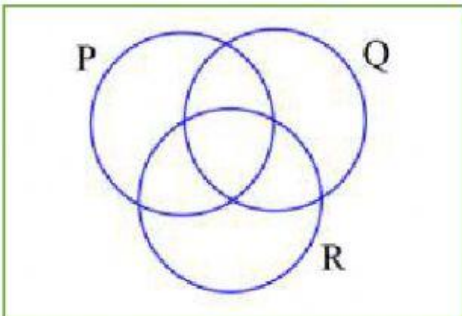
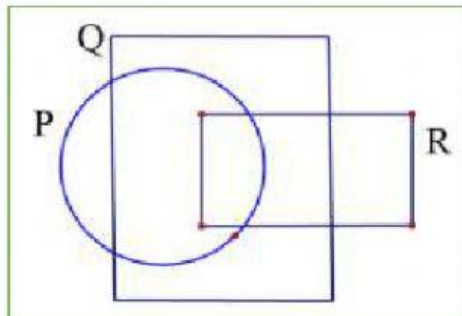
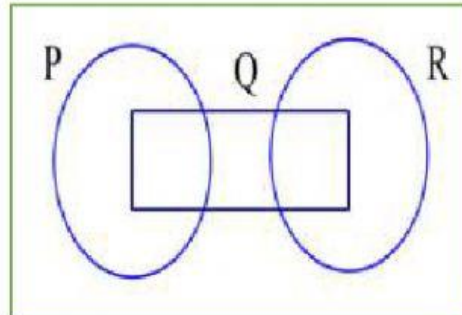
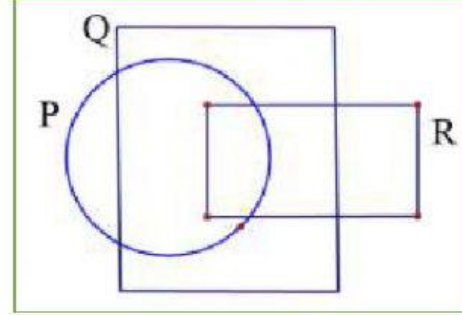
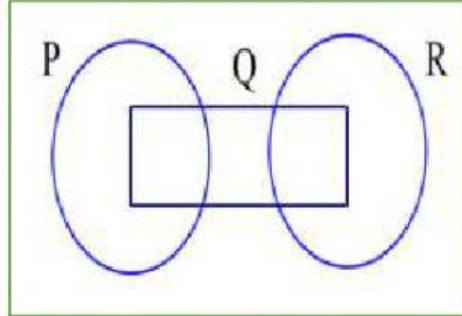


GABUNGAN OPERASI SET

Tandakan (X) pada rantau yang mewakili setiap set berikut (mungkin ada lebih daripada 1 rantau).

<p>1. $(P \cup Q)' \cap R$</p> <p>ξ</p> 	<p>2. $(P \cup Q)' \cap R$</p> <p>ξ</p> 
<p>3. $Q \cap (P \cup R)'$</p> <p>ξ</p> 	<p>4. $Q \cap (P \cup R)'$</p> <p>ξ</p> 
<p>5. $R \cup (P \cap Q)'$</p> <p>ξ</p> 	<p>6. $R \cup (P \cap Q)'$</p> <p>ξ</p> 