


Name: _____

Subject: Year 1 Numeracy

Date: _____


Unit: Estimating

Guess how many sweets are in the box, then count them.



Estimate _____

Actual _____




Estimate _____

Actual _____



Estimate _____

Actual _____




Estimate _____

Actual _____



Estimate _____

Actual _____




Estimate _____

Actual _____



Estimate _____

Actual _____



Estimate _____

Actual _____

Name:


Class:




Estimate to the nearest 10




How many dots are there? - Estimate.

	<p>Mark the answer.</p> <p>about 6</p> <p>about 15</p> <p>about 30</p>
--	--

How many dots are blue? - Estimate.

	<p>Mark the answer.</p> <p>about 20</p> <p>about 5</p> <p>about 50</p>
---	--

How many dots are brown? - Estimate.

	<p>Mark the answer.</p> <p>about 80</p> <p>about 10</p> <p>about 5</p>
--	--