

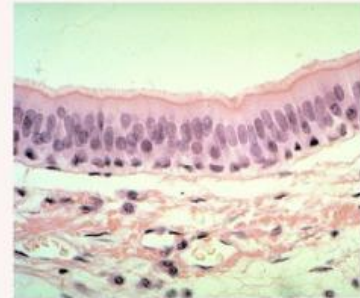
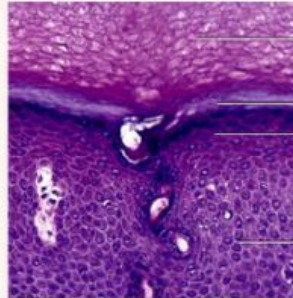
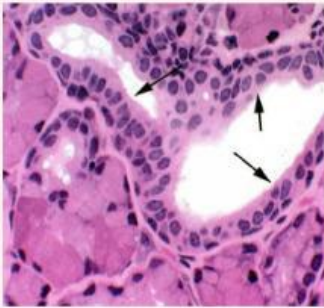
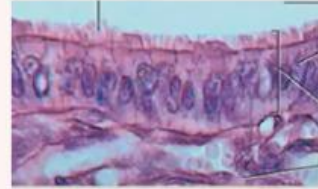
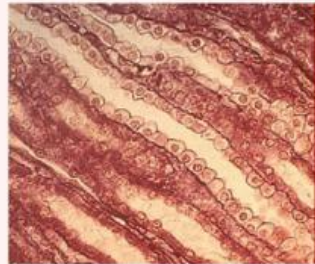
Nama: _____

Kelompok: _____

JARINGAN EPITEL

Perhatikan gambar berikut ini!

Silahkan tarik gambar ke dalam kolom yang sesuai



Jenis epitel	Gambar	Deskripsi
Simple Squamous		
Simple Cuboidal		

Jenis epitel	Gambar	Deskripsi
Simple Columnar		
Stratified Squamous		
Stratified Cuboidal		
Pseudostratified Columnar		

Tariklah garis sesuai dengan pasangannya berdasarkan letak dari masing-masing epitel



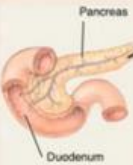
Pseudostratified Columnar



Simple Squamous



Stratified Cuboidal



Stratified Squamous



Simple Cuboidal



Simple Columnar

