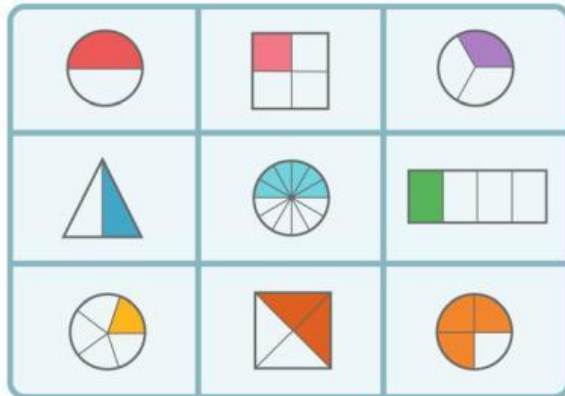


# FRACTIONS, PERCENTAGES, AND DECIMALS

1. Match this picture with the fraction value choices below!



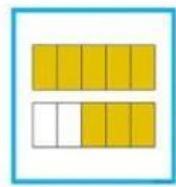
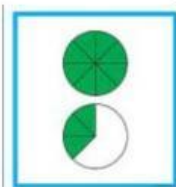
$\frac{1}{4}$	$\frac{2}{4}$	$\frac{1}{3}$
$\frac{1}{2}$	$\frac{1}{4}$	$\frac{3}{4}$
$\frac{6}{12}$	$\frac{1}{2}$	$\frac{1}{5}$

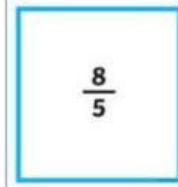

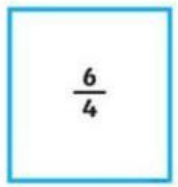
2. Express the division sentences as fractions.

3:4
6:10
11:6

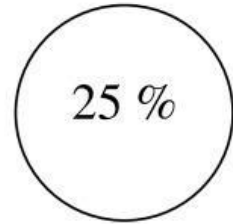
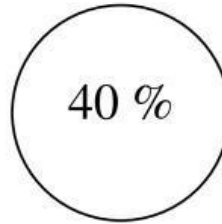
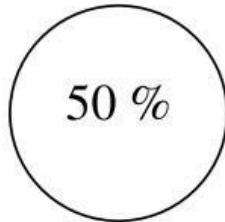
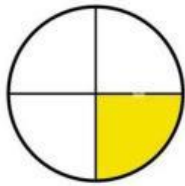
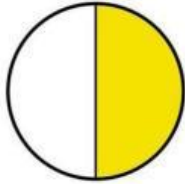
$\frac{6}{10}$
$\frac{11}{6}$
$\frac{3}{4}$

3. 2 loaves of bread were cut into equal pieces. If there are 10 students, what fraction will each student receive?
- A.  $\frac{1}{2}$   
 B.  $\frac{2}{5}$   
 C.  $\frac{2}{10}$
4. Solve this question,  $\frac{2}{5}$  of 50 cm is...
- A. 10 cm  
 B. 50 cm  
 C. 20 cm
5. Match this improper fractions.





6. Choose the right percentages of this fractions!



7. If there are 100 students and the proportion between girls and boys are 45 and 55, so what the decimal and percentage of girls in that school?

A.  $\frac{45}{100}$  and 45%

B.  $\frac{55}{100}$  and 55%

8.

Decimals	Fractions	Percentages
0,1	$\frac{1}{10}$	...
	$\frac{7}{10}$	70%

9. Arrange the numbers from the smallest to greatest.

0,2	$\frac{1}{10}$	45%	$1\frac{1}{2}$
-----	----------------	-----	----------------

--	--	--	--



10.

There are.... out of.....apples are red apples.

The ratio between red apples, green apples and yellow apples are... : ... : ...

11. This is me and my classroom's friend.



The proportion of boys in the classrom that are — or .....%.

The ratio between girls and boys are ...