

INSPIRED TOTS EARLY LEARNING CENTRE
SECOND TERM CONTINUOUS EXAMINATION, 2024.

NAME: _____ DATE: _____

SCIENCE

3RD GRADE

Circle the correct answer.

1. Which of the following is the beginning of the plants' life cycle? a. Plants b. Beans c. Seeds d. Leaves
2. A _____ is the different parts of a living thing's life as it grows and changes. a. Book b. years c. Seed d. Life cycle
3. What does a seed need to grow? a. Wind b. Exercise c. Shelter d. Water
4. What is something that an adult plant can do that young adult plants and seedlings cannot do? a. Stay up late b. Have roots c. Produce seeds d. Have leaves
5. The _____ of a plant grows first. a. Leaves b. Root c. Flowers d. Fruits
6. The _____ sometimes protects the seeds. a. Flower b. Roots c. Fruits d. Leaves
7. What is the reason some animals have camouflage? a. To hide them from predators b. To help them move c. To help them stay warm d. To help them have babies
8. Which one of the following is not a type of animal covering? a. Fur b. Scales c. shells d. Ripples
9. The dove has _____. a. Fur b scales c. Feathers d. Skin
10. What animal group are humans a part of? a.insects b. Mammals c. Reptile d. Amphibian

INSPIRED TOTS EARLY LEARNING CENTRE
SECOND TERM CONTINUOUS EXAMINATION, 2024.

NAME: _____ DATE: _____

11. What type of animal is a dog? a. Mammal b. Reptile c. Fish d. amphibian


12. The picture below shows the different stages of a butterfly's life. Choose the words from the box to tell about each picture. Number each picture to show the correct order.

adult	pupa	egg	larva
-------	------	-----	-------

Stage Number: _____



Stage Number: _____



Stage Number: _____



Stage Number: _____



13. Match the picture with the correct stage of the flowering plant's life cycle.

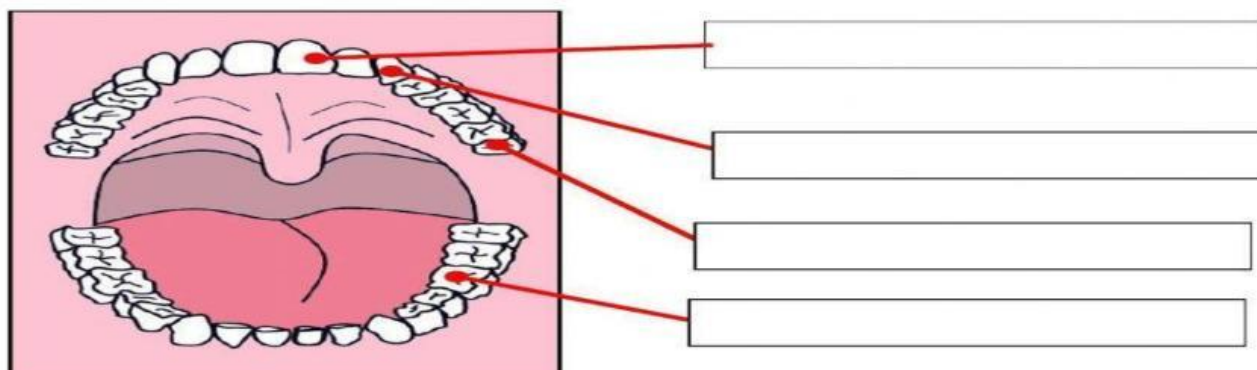
NAME: _____ DATE: _____

- 

**INSPIRED TOTS EARLY LEARNING CENTRE
SECOND TERM CONTINUOUS EXAMINATION, 2024.**

NAME: _____ DATE: _____

Use the word bank below to help label the teeth...



- Complete the following sentences.

Incisors are used for _____ and _____.

Canines are used for _____.

Premolars are used for _____, _____ and _____.

chewing	canine	biting	crushing
incisor	premolar	molar	cutting
	tearing	grinding	

23. _____ can make water unfit for drinking . a sand b. School c. filtering d. boiling

24. Good drinking _____ has no colour. a. bottle b. cup c. Water d. pot

25. Human beings cannot do without ____ and ____ . a. Rice and beans b. Pencil and biro c. Air and water d. Dancing and rejoicing

26. What are the three states of water? a. Rain water, tap water and b. Liquid water, frozen water and water vapour c. Gas, steam and vapour

INSPIRED TOTS EARLY LEARNING CENTRE
SECOND TERM CONTINUOUS EXAMINATION, 2024.

NAME: _____ DATE: _____

27. Which form of water can we feel, see and crush? a. Solid b. Liquid c. gaseous
28. What will happen if we leave a small piece of ice cube in the sun?
a. It will become black b. It will change into water c. Both a and b
d. It will start boiling
29. A large source of water is _____. A. pond b. Ocean c. River d. fountain
30. What do you understand by the word wilting?

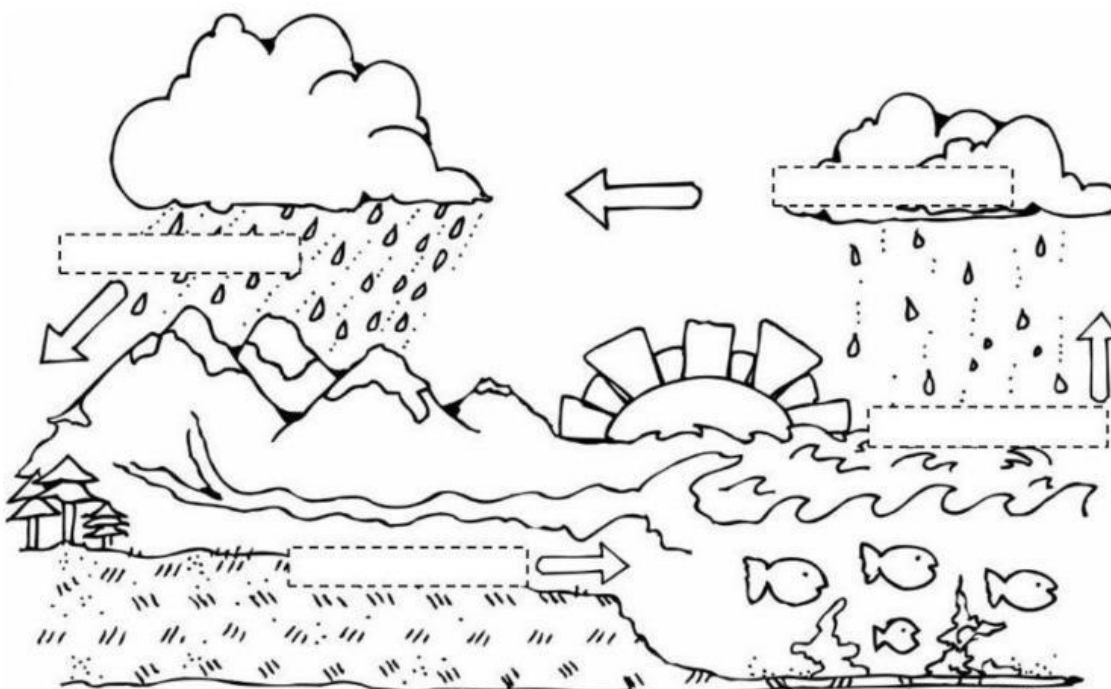
II. Label the diagram of the Water Cycle.

Evaporation

run-off/accumulation

condensation

precipitation



INSPIRED TOTS EARLY LEARNING CENTRE
SECOND TERM CONTINUOUS EXAMINATION, 2024.

NAME: _____ DATE: _____