



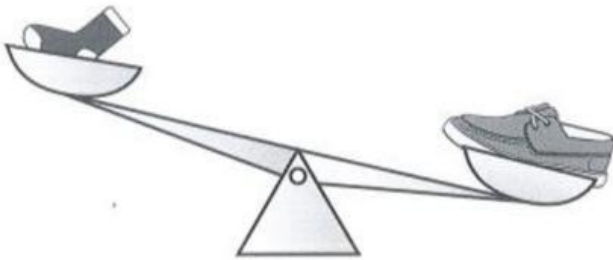
Name: \_\_\_\_\_

Date: \_\_\_\_\_

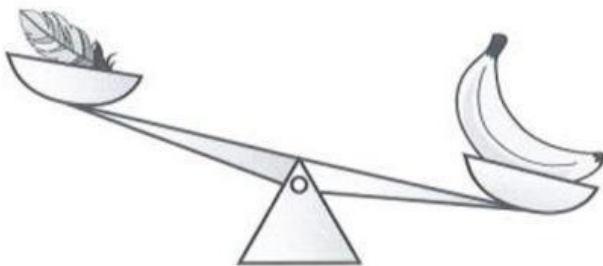
Class: \_\_\_\_\_

Part 1. Choose the correct answer.

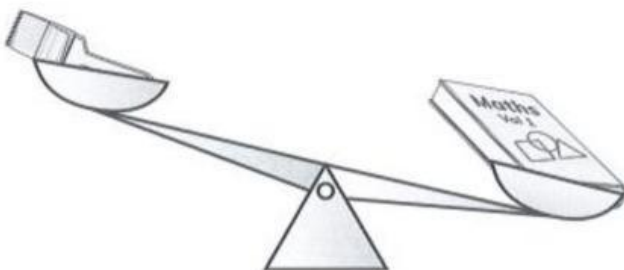
1. Which is heavier?



2. Which is heavier?



3. Which is lighter?



**Part 2. Fill in the missing words.**

heavier

lighter

balance


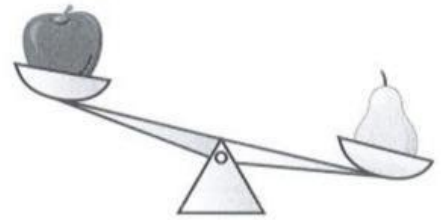
The apple is \_\_\_\_\_ than the pear.

The pear is \_\_\_\_\_ than the apple.

The pear and the lemon \_\_\_\_\_.

The strawberry is \_\_\_\_\_ than the grapes.

The grapes are \_\_\_\_\_ than the strawberry.



**Part 3. Choose the correct answer.**

1. Which holds the most?



2. Which holds the least?



3. Which holds the most?



4. Which holds the least?



5. Which holds the most?

