



Name: _____

Date: _____

Class: _____

Part 1. Circle the correct word.

a



Half

Whole

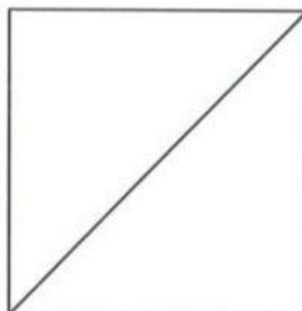
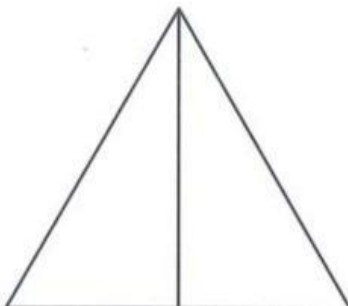

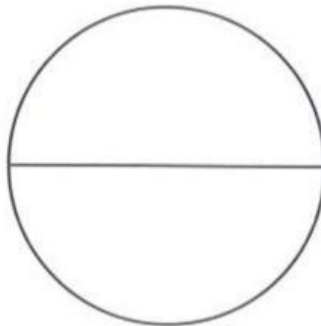

b



Half

Whole

Part 2. Choose the shape that shows 2 halves.



Part 3. Find half of each set.



Half of 6 is _____



Half of 4 is _____

Part 4. Read and answer the questions.

a. How many whole cakes? _____

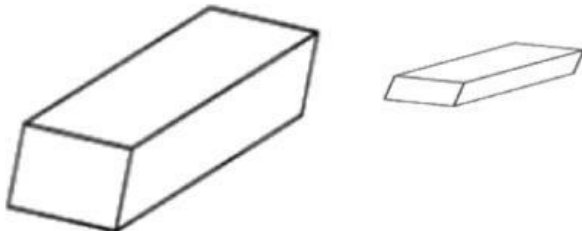


b. There were 4 whole apples. How many have been eaten? _____



Part 5. Look, read and choose the correct picture.


1. Which is thinner?



2. Which holds the least?



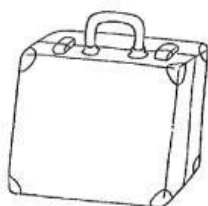
3. Which is lighter?



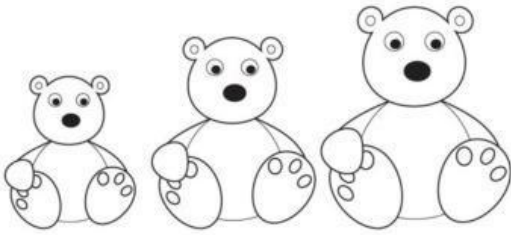
4. Which has the smallest capacity?




5. Which has the biggest capacity?



6. Which is the shortest?



7. Which is the tallest?



8. Which is longer?



9. Which is the longest?

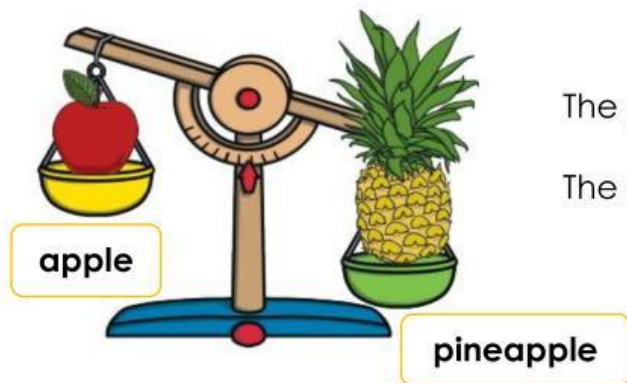


Part 6. Fill in the missing words.

lighter

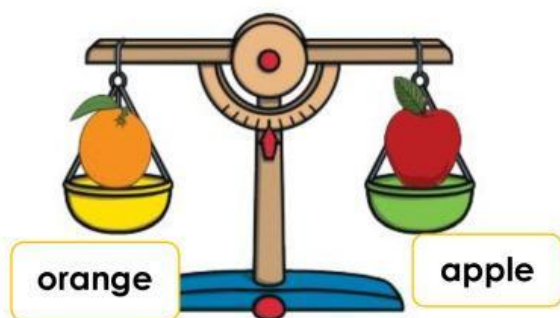
heavier

balance



The pineapple is _____ than the apple.

The apple is _____ than the pineapple.



The orange and the apple _____ .

Part 7. Choose and write.

hot

cold

warm







Part 8. What are they talking about? Read and match.

capacity

I don't have many apples.
My bag is very light.



mass

My backpack is full.
I can't take any more books.



temperature

I am 80 centimetres tall.



length

This is the hottest day
of the year!



height

This snake is 2 metres long!



Part 9. To balance the scales you need the same mass on both sides.



These scales balance.
The car has the same
mass as 4 cubes.



These scales balance.
The mug has the same
mass as 7 cubes.

__ THE END __



How many cubes will
balance the car and
the mug?