

Volume of liquids and cuboids

Convert each container's capacity milliliters.



0.75L

_____ mL



2L

_____ mL



0.25L

_____ mL



5.75L

_____ mL

Convert each container's capacity to liters.

0.75ml



_____ L



_____ ml

250mL



_____ L

5.205L




_____ ml

Total Volume

Calculate the total volume these of containers.



25mL each

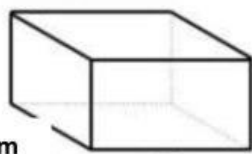


total volume =

_____ mL

Calculating Volume

4cm



6cm

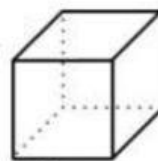
7cm

volume =

_____ cm³

5cm

4cm



4cm

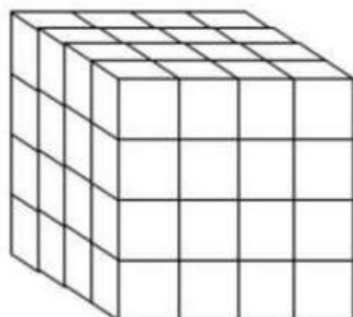
volume =

_____ cm³

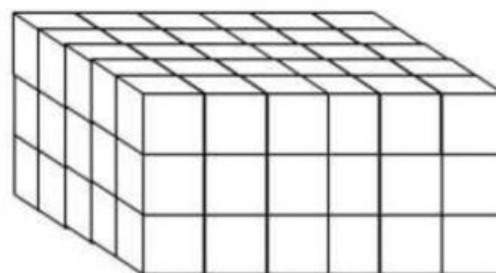
Volume of 3D Stacks



= 1 cm³



volume =
_____ cm³



volume =
_____ cm³