	MID 2nd SEMESTER EXAMINATION PAPER ACADEMIC YEAR 2021/2022	
	Subject : Math	Name :
	Primary : 1	Day/ Date :

I. Chose the correct answer!

1. What is the missing number

79	81
----	-------	----

a. 82

b. 80

c. 83

2. One less from this number is ...

...	93
-----	----



a. 94

b. 92

c. 90

3. One more from this number is

74
----	-------



a. 73

b. 75

c. 70

4. 90..... 87

a. smaller than

b. bigger than

c. same

5. 69.....80

a. same

b. smaller than

c. bigger than

6. $42 + 34 = \dots$

a. 76

b. 75

c. 74

7. $22 + 63 =$

a. 84

b. 85

c. 84

8. Which one is the greatest number from the following number...

a. 87

b. 93

c. 79

9. Which one is the smallest number from the following number...

a. 76

b. 67

c. 87

10. Arrange the following number from the smallest to the biggest.

35, 42, 27, 54


a. 27, 35, 42, 54

b. 54, 42, 35, 27


c. 27, 35, 54, 42

II. Find the correct answer by grouping.

1. $72 + 5 =$



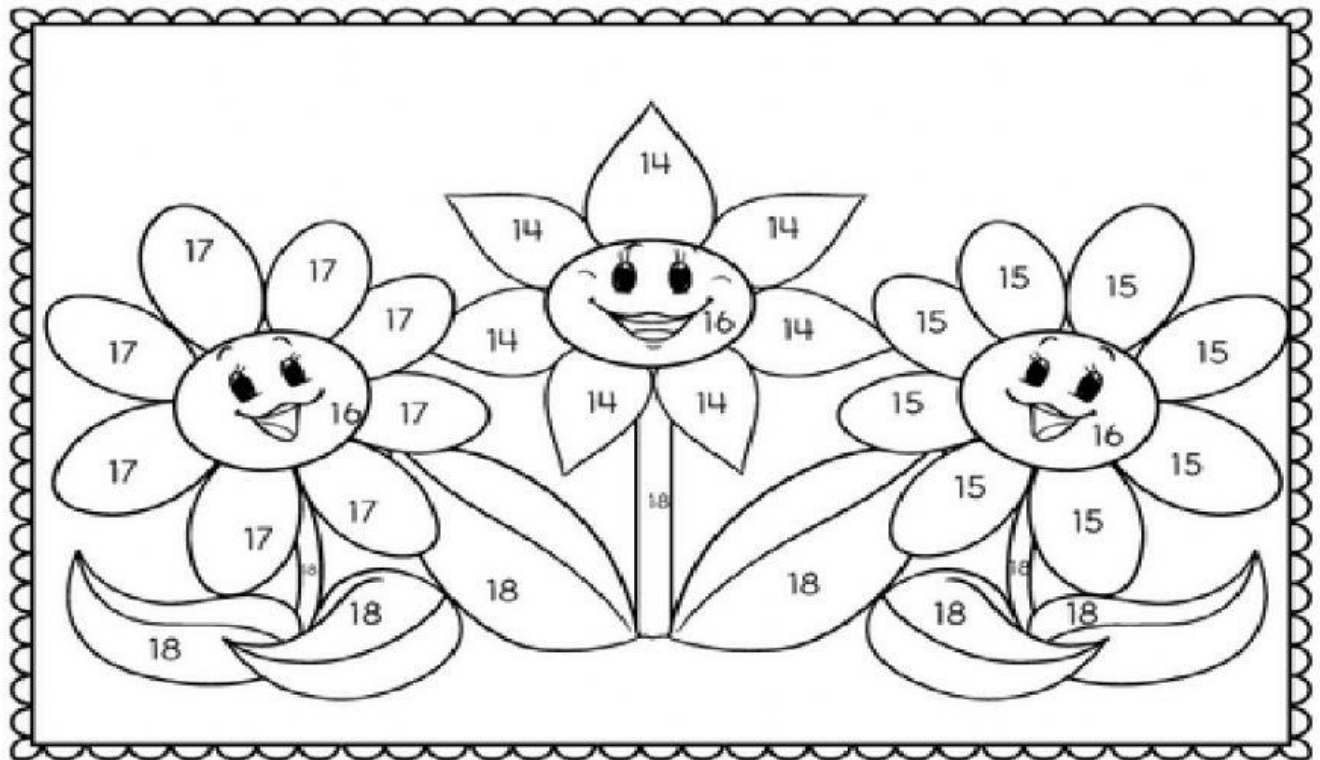
2. $45 + 23 =$



3. $61 + 36 =$



III. Color this picture based on the numbers that are given.(
For this part please print it out and then send it to my
WA)



Color Key

$2 + 12 = \underline{\hspace{2cm}} \text{ Blue}$

$15 + 1 = \underline{\hspace{2cm}} \text{ Yellow}$

$7 + 10 = \underline{\hspace{2cm}} \text{ Pink}$

$16 + 2 = \underline{\hspace{2cm}} \text{ Green}$

$11 + 4 = \underline{\hspace{2cm}} \text{ Orange}$