


# Science


## Unit 4

Name:


Label the state of matter shown by each group of particles.



Liquid



Solid



Gas

Read and circle T (true) or F (false):

1. Liquids take the shape of its containers.

T / F

2. Milk is a solid.

T / F

3. A pencil is a solid, it has its own shape.

T / F

Drag and drop the words

**matter**

**liquid**

**molecule**

**solid**

**gas**

1. Anything that has weight and occupies space is called \_\_\_\_\_.

2. \_\_\_\_\_, \_\_\_\_\_, and \_\_\_\_\_ are the three states of matter.

3. The tiny particles that make up matter are called \_\_\_\_\_.