

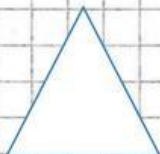
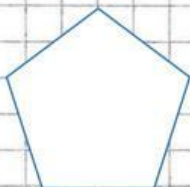
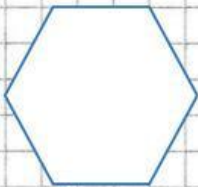
NOME: _____

TERMINI DELLA DIVISIONE

$$326 : 2 = 163$$

POLIGONI

COLLEGA IL POLIGONO AL SUO NOME



QUADRILATERO

ESAGONO

TRIANGOLO

PENTAGONO