
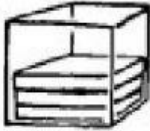




How Many Will Fill It?

Look at the objects and see how much it took to fill it up where it is in the picture. Then, estimate how much it would hold in total. *Think about the number it shows first and how much you will have to add to make it full.*

Container	Estimate
 There are 5 shovels of sand in this bag.	It holds about _____ shovels.
 There are 3 boxes in this bin.	It holds about _____ boxes.
 There are 4 spoonfuls of water in this glass.	It holds about _____ spoonfuls.
There are <u>1</u>  scoops in this jar.	It holds about _____ scoops.