


Name: \_\_\_\_\_

Date: \_\_\_\_\_ Class: \_\_\_\_\_

**1. Tick the natural features.**



**2. Complete the table about landscapes.**

lighthouse bay cape bridge wind farm city valley plateau

man-made features	natural features
<input type="text"/>	<input type="text"/>
<input type="text"/>	<input type="text"/>
<input type="text"/>	<input type="text"/>
<input type="text"/>	<input type="text"/>

**3. Circle the correct words.**

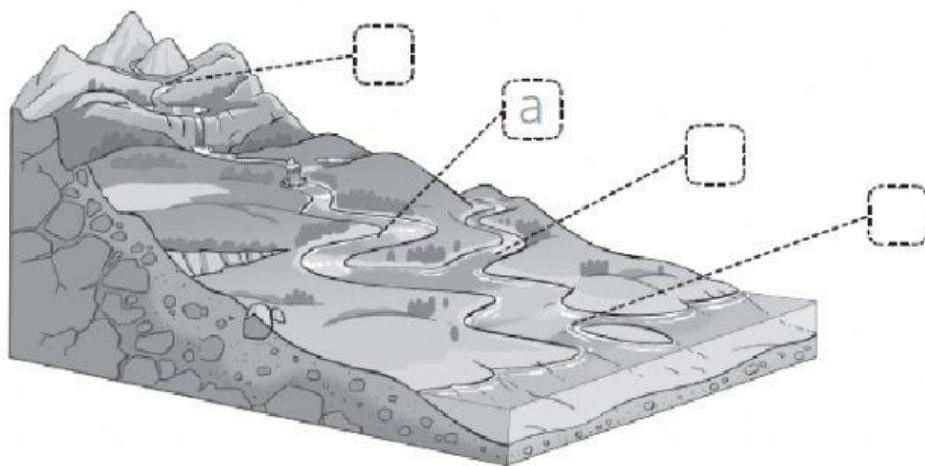
- a A group of islands / mountains is called a mountain range.
- b An archipelago / A mountain range is a group of islands.

Name: \_\_\_\_\_

Date: \_\_\_\_\_ Class: \_\_\_\_\_

**4. Match the parts of a river. Then, label the picture.**

<b>a</b> river bed	• where a river begins
<b>b</b> source	• a small river which joins a big river
<b>c</b> tributary	• where a river connects to the sea
<b>d</b> mouth	• the ground under a river



**5. Complete the sentences.**

stones fresh waste cooking water ground drinking

- a** All living things need \_\_\_\_\_.
- b** We can find \_\_\_\_\_ water in rivers and lakes.
- c** Objects like \_\_\_\_\_ do not need water.
- d** \_\_\_\_\_ water is cleaned before arriving in our homes.
- e** We can also find fresh water under the \_\_\_\_\_.
- f** We use water for many activities, such as farming and \_\_\_\_\_.
- g** Water is important to life and we must not \_\_\_\_\_ it.

Name: \_\_\_\_\_

Date: \_\_\_\_\_ Class: \_\_\_\_\_

**6. Circle the BAY.**



**7. Match.**



lake

valley

mountain

river

**8. Match.**

plain

valley

cliff

beach

lake


a

b

c

d

e





Name: \_\_\_\_\_

Date: \_\_\_\_\_ Class: \_\_\_\_\_

**9. Circle the VALLEY.**



**10. Label the man-made features.**

wind farm • city • lighthouse • bridge



**11. Circle the man-made features.**

