

Unit of Measure 2

Name _____

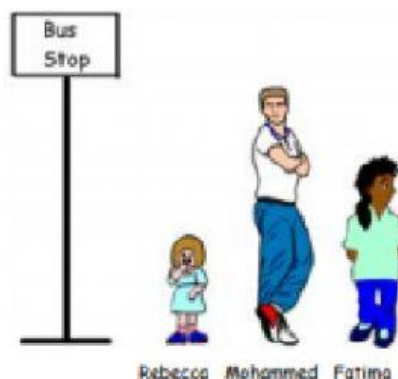
Date _____

At the Bus Stop

Rebecca, Fatima and Mohammed are waiting for a bus

5a) Who is the tallest?

Answer



5b) Fatima is shorter than Rebecca. Is this true or false?

Tick (☒) one box

True ☐


False ☐

5c) A bus can seat more people than a car? Is this true or false?

Tick (☒) one box

True ☐

False ☐



5d) The car is heavier than the bus. Is this true or false?

Tick (☒) one box


True ☐

False ☐

5e) Mohammed and Fatima each buy a bottle of milk.

Which bottle has the most milk in it?

Tick (☒) one box



Unit of Measure 2

Name _____

Date _____

Kitchen Shapes

6a) What shape is the plate?

a circle ☐

a square ☐



6b) What shape is the tea-towel?

a rectangle ☐


a square ☐



6c) What shape is the cookery book?

a circle ☐

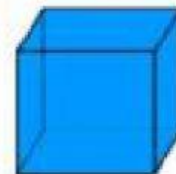
a square ☐



6d) What shape is the container?

a rectangle ☐

a cube ☐

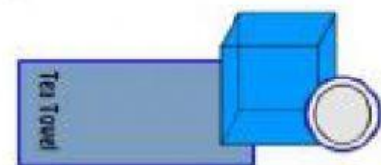


6e) The tea towel is inside the container. True or false?

Tick (☒) one box

true ☐

false ☐



6f) The book is between the plate and the container. True or false?

Tick (☒) one box

true ☐

false ☐

