

Name: _____


Class: I

Chapter: 11. How Many Times?

Subject: Maths

Tick the correct answer:

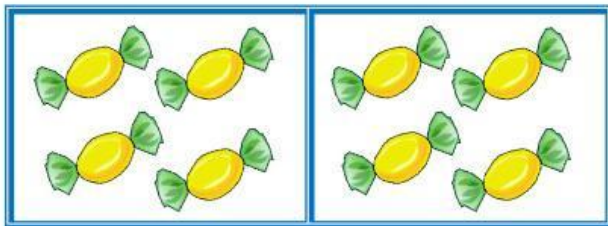
1.

3 times 5 ☐4 times 3 ☐

2.

4 times 5 ☐2 times 5 ☐


3.

2 times 4 ☐2 times 5 ☐

4.

6 times 2 ☐5 times 2 ☐

5.

3 times 3 ☐4 times 4 ☐