

Name _____ Date _____

Independence: ____/4

Count the items, express the part to part ratio. Drag numerals and the : sign into boxes provided.

1. Express the ratio of red birds to black birds.



--	--	--

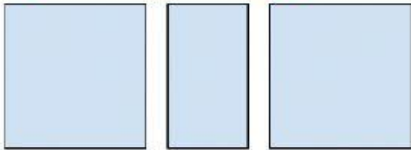

1 2 3 4 :

2. Express the ratio of crayons to scissors.



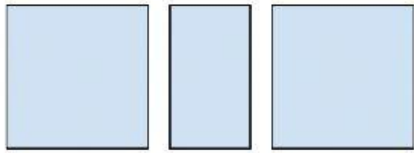

1 2 3 4 :

3. Express the ratio of triangles to squares.



1 2 3 4 :

3. Express the ratio of crackers to apples.



1 2 3 4 5 :