



Al Muhammadiyah Schools and kindergarten
First Semester 2023/2024
First Science Exam

15

Class & section : Grade 2 (A)

Student's Name:

Day :

Date :/...../2023

Question One: Label the food pyramid using the word box.
(6 Marks)

Fruits

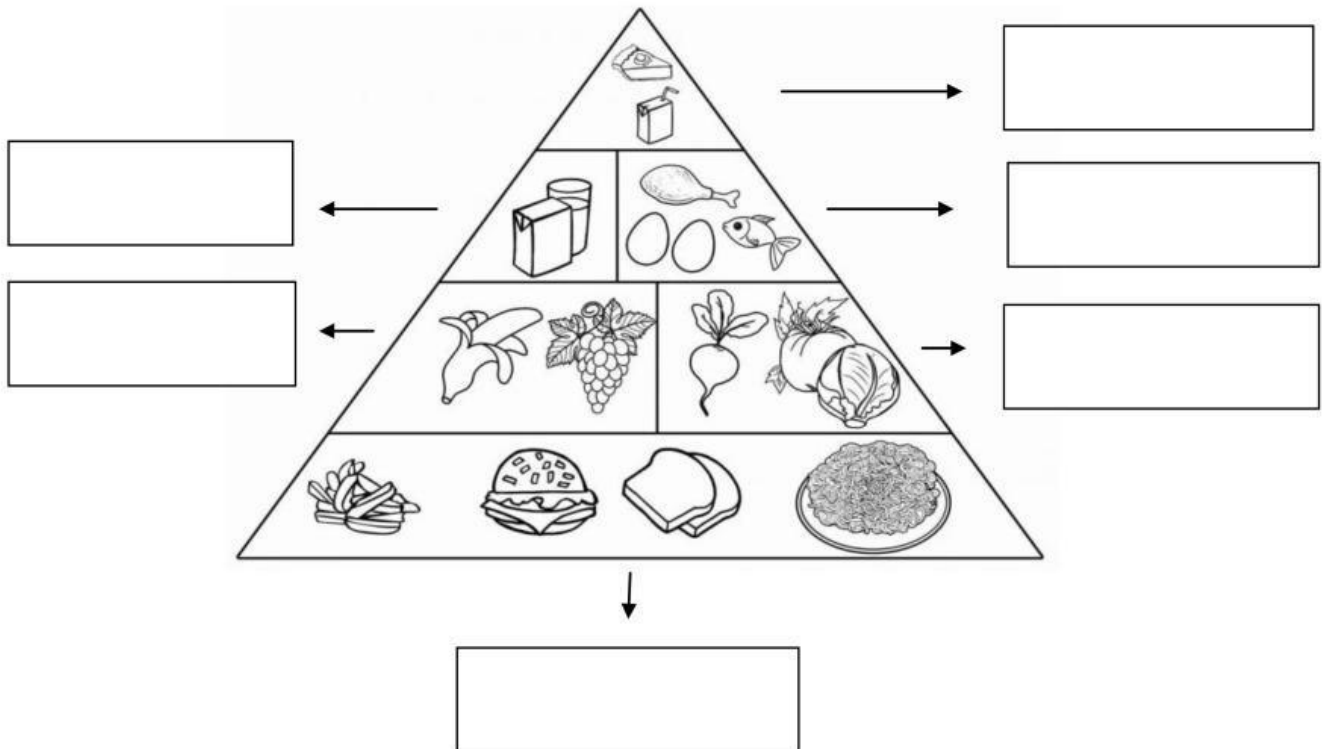
Vegetables

Fats

Protein

Dairy

starchy foods



Question Two: Write True or False next to each sentence.
(3 Marks)

1-We don't need food and water to stay alive. ()

2-We eat different kind of foods when we celebrate. ()

3- A balanced meal has food from all the food groups. ()

Question Three: Match the picture to the word.(3 Marks)



Run








Football



Volleyball

Question Four: Write the name of each stage in a human's life using the word box.(3 Marks)

Old age Baby Adult Child Toddler teenager

					
<input type="text"/>	<input type="text"/>	<input type="text"/>	<input type="text"/>	<input type="text"/>	<input type="text"/>

Good luck