



Periodic Test-4 (2020-21)






Class – II

Sub – Mathematics

Total marks –5

Subject Enrichment Activity

Study the table given below and answer the questions:

Car Color	Number of cars
Red Car 	16
Green Car 	12
Blue Car 	5
Black Car 	4
Orange Car 	13

1. How many red and black cars are there together?

2. How many more orange cars than blue cars are there?

3. How many orange cars are there?

4. How many green and orange cars are there together?

5. How many cars are there in all?