

Final test

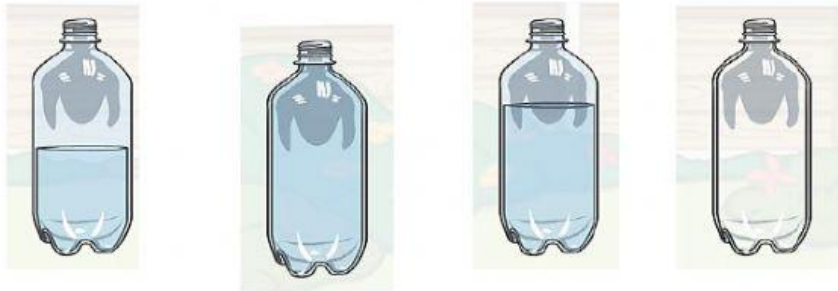
Comparing capacities

1. Match the labels to the correct mug. Full, Half full, Nearly full, Nearly empty, Empty



--	--	--	--	--

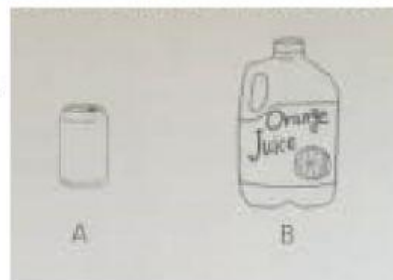
2. Fill in the blank with Full, Half full, Nearly full, Empty



--	--	--	--

3.

a. Which container can hold more? A or B



--

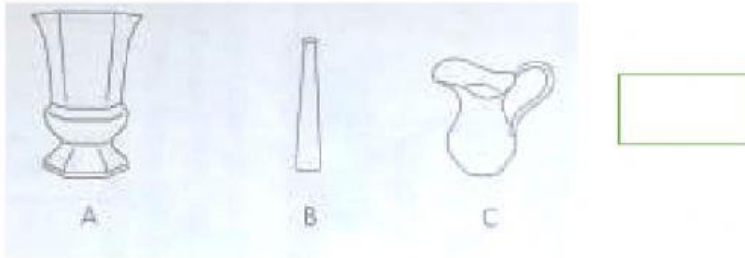
b. Which container can hold less? A or B



--

4.

a. Which container can hold the least? A, B or C



b. Which container can hold the most? A, B or C



5. Harry Fills similar cups with all the water from Bottle A, Bottle B and Bottle C. Fill in the blanks with the correct answer.

- a. Bottle A can hold _____ Cups of water
- b. Bottle B can hold _____ Cups of water
- c. Bottle C can hold about _____ cups of water
- d. Bottle _____ has the largest capacity
- e. Bottle _____ has the smallest capacity

