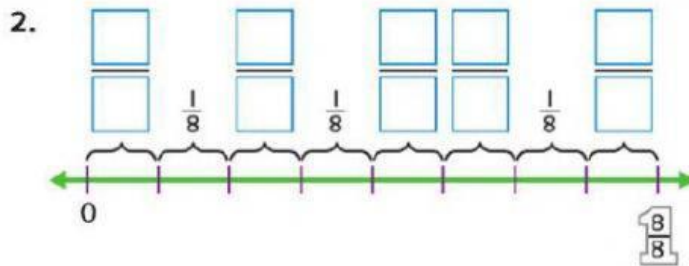
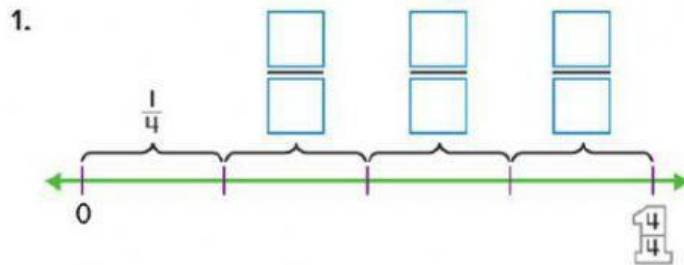


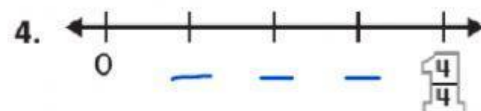
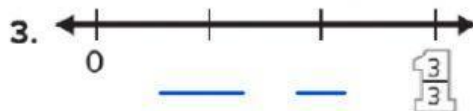
Name: \_\_\_\_\_

Teacher: **Piyush Mishra**

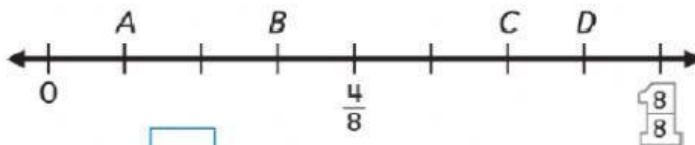
**Label each unknown with the fraction of the whole it represents.**



**Label the fractions between 0 and 1 on the number lines.**



**Write the fraction that is represented by each point.**



5. Point A is  $\frac{\boxed{\phantom{00}}}{\boxed{\phantom{00}}}$ .

6. Point D is  $\frac{\boxed{\phantom{00}}}{\boxed{\phantom{00}}}$ .

7. Point C is  $\frac{\boxed{\phantom{00}}}{\boxed{\phantom{00}}}$ .

8. Point B is  $\frac{\boxed{\phantom{00}}}{\boxed{\phantom{00}}}$ .

*real work*