


1. Match the 3D shapes to their names.

1



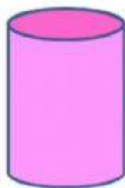
A Cube

2





B Cylinder

3



C Cone

2. Drag and drop the correct picture that can roll.



3. Fill in the blanks.

a. _____ has 6 flat faces.

b. Cylinder has _____ and 1 curved face.