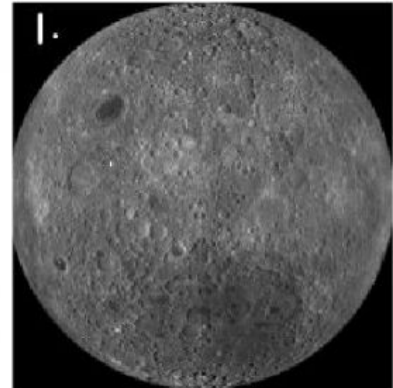


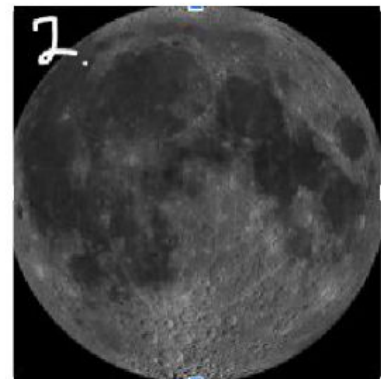
Labeling the Moon

Name _____
 Period _____ Date _____


1. Which of the following does photograph 1 represent the most?
- A. Highlands
 - B. Near side of Moon
 - C. Far side of Moon
 - D. Mars



2. Which of the following does photograph 2 represent the most?
- A. Highlands
 - B. Near side of Moon
 - C. Farside of Moon
 - D. Mars




3. Which of the following does photograph 3 represent the most?
- A. Highlands
 - B. Craters
 - C. Marias
 - D. Mars



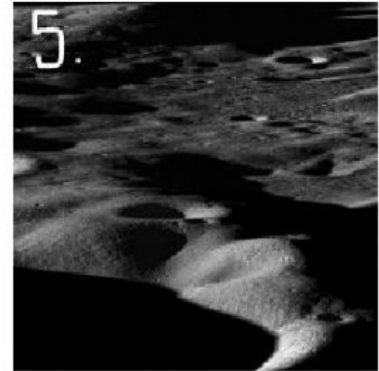
4. Which of the following does photograph 4 represent the most?

- A. Highlands
- B. Craters
- C. Marias
- D. Mars



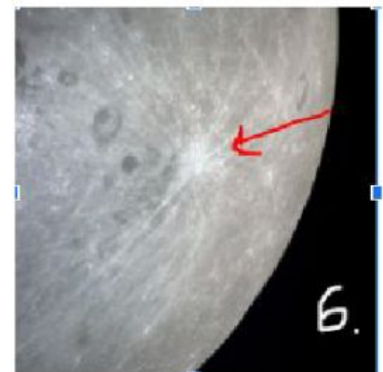
5. Which of the following does photograph 5 represent the most?

- A. Highlands
- B. Craters
- C. Marias
- D. Mars



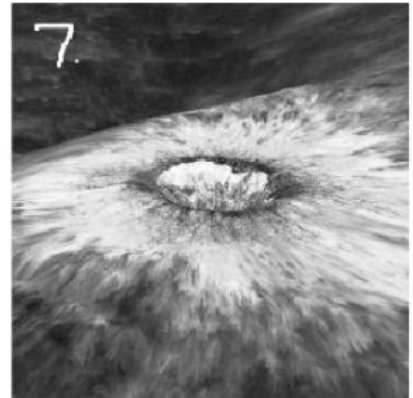
6. Which of the following does photograph 6 represent the most?

- A. Highlands
- B. Craters
- C. Marias
- D. Mars



7. Which of the following does photograph 7 represent the most?

- a. Highlands
- b. Craters
- c. Marias
- d. Mars



8. Which of the following does photograph 8 represent the most?

- A. Highlands
- B. Craters
- C. Marias
- D. Mars

