

Name _____ Date _____

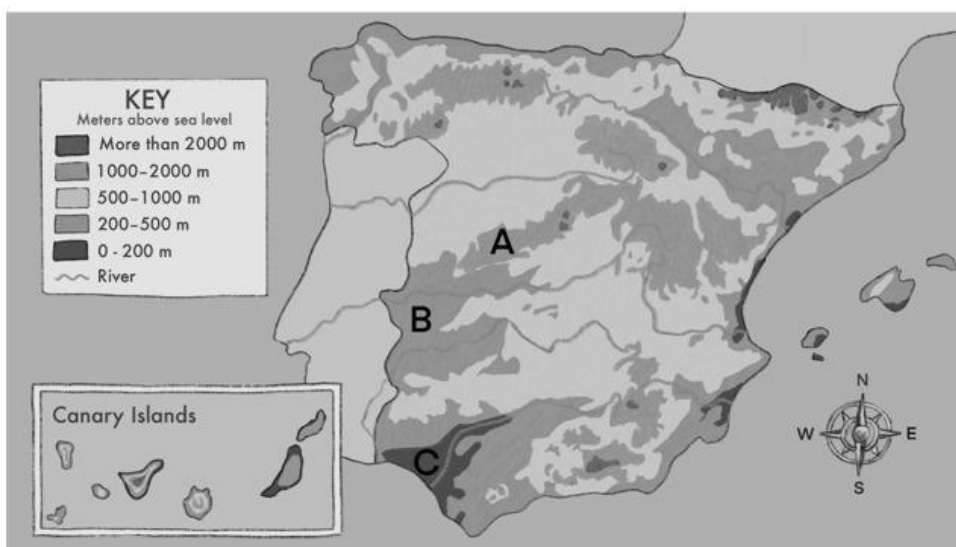
1 Circle the correct word.

/6 marks

- Talc is the **softest** / **hardest** mineral.
- An archipelago is a group of **mountains** / **islands**.
- Granite is an example of **igneous** / **metamorphic** rock.
- Magma** / **Lava** explodes out of a volcano.
- A strip of land with water on three sides is called a **peninsula** / **bay**.
- Marble and gneiss are examples of **metamorphic** / **sedimentary** rock.

2 Write how high A, B and C are in words.

/6 marks



A is ... _____

B is ... _____

C is ... _____

Rocks and relief

3 Complete the table.

/8 marks

marble
talc

granite
sandstone

chalk
calcium

gneiss
obsidian

igneous rock	sedimentary rock	metamorphic rock	minerals

4 Write *true* or *false*.

/8 marks

- a. Diamond is the softest mineral.

- b. Igneous rock forms when lava cools and hardens.

- c. Only high temperatures produce metamorphic rock.

- d. Contour lines show where cities and towns are on maps.

- e. A group of islands is called an archipelago.

- f. Bays are usually the shape of a C.

- g. Islands only have water on three sides.

- h. Calcium is a mineral which keeps our teeth and bones healthy.

Rocks and relief

Natural Science Unit 2 TEST CEIP Tierno Galván


5 Listen. Write the landform they visited and the mineral they found. 

/8 marks


Speaker	Landform	Mineral
Speaker 1	<hr/>	<hr/>
Speaker 2	<hr/>	<hr/>
Speaker 3	<hr/>	<hr/>
Speaker 4	<hr/>	<hr/>

Total for test ___/36 marks


How do you feel? Circle, write and draw.



happy



OK



sad

I feel _____ about my test.

